




# Subtracting And Adding 2



Count the dice dots and write the numbers.



+



\_\_\_\_\_

-


\_\_\_\_\_

=

\_\_\_\_\_



-



\_\_\_\_\_

-

\_\_\_\_\_

=

\_\_\_\_\_



+




\_\_\_\_\_

-


\_\_\_\_\_

=

\_\_\_\_\_



-




\_\_\_\_\_

-

\_\_\_\_\_

=

\_\_\_\_\_



+



\_\_\_\_\_

-

\_\_\_\_\_

=

\_\_\_\_\_



-



\_\_\_\_\_

-


\_\_\_\_\_

=

\_\_\_\_\_



+



\_\_\_\_\_

-

\_\_\_\_\_

=

\_\_\_\_\_