



# Subtracting And Adding 3



- Count the dice dots and write the numbers.



+




\_\_\_\_\_ - \_\_\_\_\_ = \_\_\_\_\_




-



\_\_\_\_\_ - \_\_\_\_\_ = \_\_\_\_\_



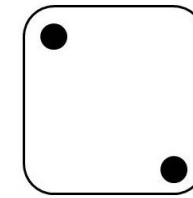
+




\_\_\_\_\_ - \_\_\_\_\_ = \_\_\_\_\_




-



\_\_\_\_\_ - \_\_\_\_\_ = \_\_\_\_\_




+




\_\_\_\_\_ - \_\_\_\_\_ = \_\_\_\_\_




-



\_\_\_\_\_ - \_\_\_\_\_ = \_\_\_\_\_



+



\_\_\_\_\_ - \_\_\_\_\_ = \_\_\_\_\_